

Summer



HOMework

Name: _____

Primary 2

Dear Parents,

Summer break is here!!! It has been such a joy to watch your children grow and learn so much. We are very proud of all the progress each child has made. Your support and efforts at home have been a major reason for your child's successes every time. Each of you is to be commended for your efforts.

In order to make sure that your child keeps the "brain juices" flowing over the summer break, we have put together a packet that reviews great materials we have learned till now and an introduction of what we will learn in future. Completing the assigned pages each week would be very beneficial as it would help ensure retention of the materials learned. Moreover, completion of this packet will get us off on the right foot when your child returns to school.

Once again, thank you for all your support! We look forward to seeing all of your children's bright and shining faces soon. Enjoy the summer!

Regards,

Management

Be Creative, Be Kind, Be Happy, Be Safe & Be You!

E-LEARNING SECTIONS

Select the age and level of your child and Let your child explore the following links to learn through audio and visual aids.

- 1) <https://stories.audible.com/start-listen>
- 2) <https://drive.google.com/drive/folders/1HZ-kNNfn5W0JEGZ2ifFdA9plu6ZUcRzu>
- 3) <https://www.facebook.com/165912746795398/posts/2737990939587553/>
- 4) <https://en.e-learningforkids.org/>
- 5) <https://readingeggs.com/>
- 6) <https://www.starfall.com/h/>
- 7) https://www.youtube.com/channel/UCrNnk0wFBnCS1awGjq_ijGQ
- 8) <https://www.brainpop.com/>
- 9) <https://www.curiousworld.com/>
- 10) <https://www.highlightkids.com/>
- 11) <https://kids.nationalgeographic.com/>
- 12) <https://www.coolmath.com/>
- 13) <https://www.funbrain.com/>
- 14) <https://www.babytv.com/>
- 15) <http://www.agnitus.com/>
- 16) <https://www.farfaria.com/>
- 17) <http://spatulatta.com/>
- 18) <https://www.facebook.com/165912746795398/posts/2737990939587553/>
- 19) <https://drive.google.com/open?id=1Isnrbv3PclbQMflPz4F9o-7foyTHeQ5>
- 20) <https://lessonsforenglish.com/pdf>
- 21) <https://www.englishbookus.com/2019/07/cambridge-english-qualifications.html>
- 22) <https://www.englishbookus.com/2020/02/english-with-games-and-activities-level.html>
- 23) <https://www.englishbookus.com/2020/03/colins-early-learning.html>
- 24) <https://www.englishbookus.com/2020/03/disney-learning-books.html>
- 25) <https://www.englishbookus.com/2020/03/hidden-pictures-4-books.html>
- 26) <https://www.englishbookus.com/2020/03/family-friendsall-levels-audio.html>
- 27) <https://www.englishbookus.com/2020/03/super-safari-pre-k-kgkg2.html>
- 28) <https://www.englishbookus.com/2020/03/global-english-5-books-sb-wb.html>
- 29) <https://www.englishbookus.com/2020/03/oxford-classic-tales-level-1-15-tales.html>
- 30) <https://www.englishbookus.com/2020/03/jolly-phonics.html>
- 31) <https://www.englishbookus.com/2020/02/english-with-games-and-activities-level.html>
- 32) <https://englishbooktank.blogspot.com/2020/03/>

Computer Assignment:

Using MS Word, write a story (insert pictures and use different WordArt and shapes). Take a print and attach it in your file.

Activity Title: Hour of Code

The Hour of Code is a global movement by Computer Science Education Week and Code.org reaching tens of millions of students in 180+ countries through a one-hour introduction to computer science and computer programming. Any students can learn coding with fun by going through several amazing and game based learning activities available on <https://code.org/> Students will explore several hour of code activities <https://code.org/learn> ,watch video, play games and get insight of learning coding through game based activities. Students will search and play the six coding games and get their online certificate of completion. Coding through Minecraft <https://code.org/minecraft> and Star War <https://code.org/starwars> are highly recommended games.

Games Access Links:

1. Minecraft: <https://code.org/minecraft>
2. Star Wars: <https://code.org/starwars>
3. Make Music: <https://hourofcode.com/scratchmus>
4. Gumball: <https://hourofcode.com/gumadventure>
5. Code the news: <https://hourofcode.com/vidnews>
6. Rob Garden: <https://hourofcode.com/rgbegun>
7. Actimator: <https://hourofcode.com/myradream>
8. Make Don't Drop: <https://hourofcode.com/hopdropphone>
9. Switch & Glitch: <https://hourofcode.com/switchglitch>

Islamiyat Assignment:

1. Write a biography of Prophet Nooh (AS)
2. Memorize full Surah Yaseen
3. Daily Recitation




100 Times Recitation	
Monday	Alhamdulillah
Tuesday	Subhan Allah
Wednesday	Allah o Akbar
Thursday	Astagfirullah
Friday	Durood-e- Shareef
Saturday	First Kalimah
Sunday	سُبْحَانَ اللَّهِ وَبِحَمْدِهِ سُبْحَانَ اللَّهِ الْعَظِيمِ

4. Allah's Names
5. Prophet's ﷺ Names
6. Recitation of Ayat-ul-Kursi for protection
7. Dua for Increasing Eman
8. Dua for Increasing Knowledge
9. Dua for earning unlimited reward
10. Morning and Evening Tasbih
11. Miswak Application
12. 100 Times Recitation as per the day
13. Surah Yaseen (Memorization)
14. Fajar Pray
15. Zuhr Pray
16. Asar Pray
17. Magrib Pray
18. Esha Pray
19. 80 Times Friday's Durood Sharif
20. Charity as per the feasibility

Mathematics Assignment:
Mathematics Assignments

- 1) A parking lot has 30 spaces for cars. There is a car in 22 of those spaces.
 - a. How many spaces are empty?
 - b. Now, two more cars drive in. How many cars are now in the parking lot?
 - c. How many empty spaces are there now?
- 2) Isabelle had 70 marbles and her sister had 55. Isabelle gave 10 marbles to her sister.
 - a. Now how many marbles does Isabelle have?
 - b. And her sister?
 - c. Who has more? How many more?

3) Write the time in two ways: using o'clock or half past, and with numbers.

 <p>a. _____ _____ _____ : _____</p>	 <p>b. _____ _____ _____ : _____</p>	 <p>c. _____ _____ _____ : _____</p>
---	---	--

4) Draw a line that is:

a. 3 inches

b. 9 centimeters

5) Join these dots carefully with a ruler so that you get a shape.

A.

B

D.

C

a. What is this shape called? _____


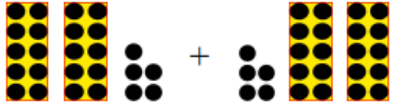
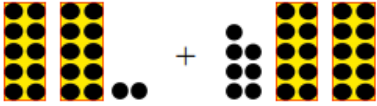
b. Measure the sides of your shape in centimeters.

Side AB: _____ cm Side BC: _____ cm

c. Draw a straight line from dot A to dot C. The line divides your shape to two new shapes.

d. What are the new shapes called? _____

6) Add. The images can help you.

 a. $19 + 34 =$ _____	 b. $25 + 25 =$ _____	 c. $22 + 27 =$ _____
---	--	---

7) Add.

a. $84 + 4 =$ _____ $41 + 4 =$ _____	b. $6 + 70 =$ _____ $16 + 2 =$ _____	c. $74 + 5 =$ _____ $6 + 53 =$ _____
---	---	---

8) Subtract.

a. $80 - 30 =$ _____ $17 - 3 =$ _____	b. $55 - 3 =$ _____ $100 - 40 =$ _____	c. $29 - 3 =$ _____ $50 - 2 =$ _____
--	---	---

My first name is _____ and
it has _____ letters.

My last name is _____ and
it has _____ letters.

My favourite number is _____ because _____. I am _____
years old. I have _____ brothers and _____ sisters. I have _____ pets at home.

My birthday is ____/____/____ My phone number is _____

There are _____ people in my
family. _____ girls, _____ boys.

I wake up at

I go to bed at

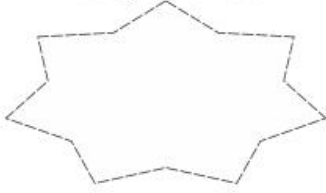
Math Boggle

Choose any two numbers. Add and Subtract to find the sum or difference.

5	20	4	17
11	2	8	16
3	13	5	7
16	18	10	1

_____	_____	_____	_____
_____	_____	_____	_____
_____	_____	_____	_____
_____	_____	_____	_____

Today's Number



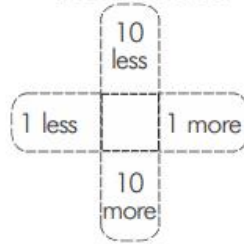
Even or Odd

Place Value

Hundreds	Tens	Ones

Word Form

More or Less



Expanded form

++=

Project:

Make your own clock which shows the activity you do at that time.



- 1) There are 8 slices of pizza. Four friends share the pizza equally. How many slices does each friend get?
- 2) There are 432 students in the school. 81 of the students are in the second grade. How many students are not in the second grade?
- 3) Trish buys 3 boxes of granola bars. There are 8 bars in each box. How many granola bars does Trish have?
- 4) Bill plants 26 daisies. He also plants 23 pansies. How many flowers does he plant in all?
- 5) I had 500 dollars. I bought a PlayStation for 275 dollars. How much money did I have left?

- 6) John bought 167 flowers on Wednesday. On Friday he bought 133 more flowers than on Wednesday. How many flowers did he buy on Friday?
- 7) A shop sold 167 cakes last week. This week the shop sold 289 cakes. How many cakes did the shop sell in all?
- 8) John bought 167 flowers on Wednesday. On Friday he bought 133 more flowers than on Wednesday. How many flowers did he buy on both days?
- 9) There are 287 mango trees in a big garden. 135 of them have fruits. How many mango trees do not have fruits?
- 10) 815 children played bingo. 316 of them won a prize. How many children did not win a prize?

E-links:

1. www.education.com/games/math/first-grade/
2. www.math-play.com/2nd-grade-math-games.html
3. www.turtlediary.com/grade-2-games/mathgames.html
4. www.math-exercises-for-kids.com/
5. www.education.com/activity/second-grade/math/SCIENCE

SCIENCE ASSIGNMENT

Find out what the different parts of the body do and write some amazing facts from the given link.

<https://www.theschoolrun.com/homework-help/parts-body>

- a. Watch a video using the given link and describe in 4 lines what is happening in the video. <https://www.youtube.com/watch?v=0Y-oExd92eE>
- b. Can you identify the spinning and moving ring used in the experiment shown in the video?
- c. Materials which are attracted by a magnet are called magnetic materials and those which are not attracted by a magnet are called non-magnetic materials. How will you identify the following items as magnetic and non-magnetic materials? Describe the procedure in 3-4 lines.

Instructions

- As part of your course, you are required to submit the review articles.

This exercise is meant to inculcate research temperament and skills by carrying out the in-depth study of given research topics relevant to the course, and to make you familiarize with different online available data resources.

- Make the assignments on the following topics.

Warning: Write in your own words, do not copy-paste. Plagiarism is not acceptable. Compile your research assignment with the help of parents or any adult, on the given topics.

1. How well do science museums really teach science?
2. Why do birds have such beautifully colored feathers?
3. Should disposable products be banned or limited?
4. Is recycling metal really important?
5. Why are honey bee colonies weakening and what can be done about it?

SOCIAL STUDIES ASSIGNMENT

Prepare a survey report of your school.


Think of the best teachers you have had. What are the qualities that made them good teachers?

URDU ASSIGNMENT

- ☆ کتاب گیندا: صفحہ نمبر ۴، ۵ اور ۶ کو کتاب میں کریں۔
 - ☆ کتاب گیندا: سبق ”میاؤں“ کی بلند خوانی کریں اور اپنے کسی رشتے دار کے بارے میں پانچ جملے کاپی میں لکھیے۔
 - ☆ کتاب گیندا: صفحہ نمبر ۱۳ پر الفاظ ملائیے اور خالی جگہ کتاب میں کریں۔
 - ☆ کتاب کرن: صفحہ نمبر ۴۲، نظم (چوہے کی بیماری) کو پڑھیے اور اسے ایک مختصر کہانی کی شکل میں لکھیے۔
 - ☆ تفہیم: کتاب گیندا: صفحہ نمبر ۲۹ ”پاکستان ہم سب کا گھر ہے“ پڑھیے اور پوچھے گئے سوالات کے جوابات لکھیے۔
 - ☆ کتاب کرن: صفحہ نمبر ۸۶، ”اصلی جواب“ کی کہانی پڑھ کر صفحہ نمبر ۸۷ پر سوالات کے جوابات کتاب میں حل کریں۔
 - ☆ کتاب کرن: صفحہ نمبر ۸۸، نظم ”چاند کی ناؤ“ پڑھ کر صفحہ نمبر ۸۹ کی مشق کتاب میں حل کریں۔
 - ☆ کتاب گیندا: صفحہ نمبر ۷۵ پر باغ کی سیر کی نثر نگاری کتاب میں کریں۔
 - ☆ کتاب گیندا: صفحہ نمبر ۷۲ ”باغ کی سیر“ کو پڑھیے اور صفحہ نمبر ۷۳ پر سوال نمبر ۱، ۲ اور ۴ کتاب میں کریں۔
 - ☆ کتاب گیندا: صفحہ نمبر ۳۵، ۳۶، ۳۷، ۳۸ کتاب میں کریں۔
 - ☆ کتاب گیندا: ”فرہنگ“ کتاب کے آخری صفحے پر سے (سوار یوں کے نام، دنوں کے نام، پھولوں کے نام اور گنتی (۱-۲۰) تک ہندسوں اور لفظوں میں یاد کریں اور کاپی میں لکھیں)۔
- عنوانات برائے تخلیقی لکھائی:
- ۱۔ میرا وطن ، ۲۔ میرا پہلا دوست
 - ۳۔ جب آپ گھر میں ہوتے ہیں تو آپ کا پسندیدہ کھیل کون سا ہوتا ہے اور کیوں؟
 - ۴۔ آپ بڑے ہو کر کیا بننا چاہتے ہیں اور کیوں؟
 - ۵۔ فرض کریں کہ آپ کمانڈر سیف گارڈ ہیں۔ ایسے میں آپ اپنے مملکت کو خطرناک جراثیم سے کیسے بچائیں گے؟

ENGLISH ASSIGNMENT


1. Imagine a juggler enters your house and changes into a real clown. Write a short story about what happened next?
 - a) What fun did you have?
 - b) Who did you invite?
 - c) What did you cook and play with the clown?
 - d) Your feelings about the clown.
2. Observe the pictures and write a small paragraph on it.



3. Use any 5 describing words in your sentences.
4. Select any 10 words and write their rhyming words. Use at least 10 words in your sentences.
5. Describe your school in ten sentences.
6. Describe your one memorable day of summer vacation.
7. Write a story about a girl who went to attend her friend's birthday party
8. Write the creative writings on the following topics
 - a. The funniest zoo animal
 - b. This person makes me laugh
 - c. What I know about an animal
 - d. What I know about dinosaurs
 - e. What I know about stars
9. Read and solve the given comprehension

Lin Lin from China

Lots and lots of people live in China....more than one billion!
People who live in China are called Chinese.



In China there is a very long wall. It is the biggest and longest wall in the whole world....more than three thousand kilometres long!
It is called The Great Wall of China.



Lin Lin comes from China.
Lin Lin's mother and father took her to see
The Great Wall of China.
They walked along the top of it for a little way.

Questions.


1. What are people who live in China called?
2. In China there is a very long
3. The wall is the longest in the whole
4. It is called The Great Wall of
5. Lin Lin saw the Wall with her mother and
6. What did Lin Lin do when she was at the Wall?

The Sun and the Moon

One day the sun said to the moon,
"I shine in the day so the people
on Earth can see."

"I give energy to all the plants and
animals.

It takes Earth a whole year to go
around me."



The moon said, "I am sometimes in the sky
in the day time and I am sometimes in the
sky at night."

"I have lots of mountains and I also have
big craters.

I make the tides in the sea.

It takes me one month to go around Earth."

Questions.

1. The sun gives energy to animals and _____
2. What goes around the sun in one year? _____
3. What is in the sky in the day or the night? _____
4. The moon has craters and _____
5. What makes the tides in the sea? _____
6. How long does the moon take to go around Earth?

The Fox and the Rabbit

One day in the forest a fox chased after a rabbit.

The rabbit hid behind a tree and the fox kept running.



“Where are you rabbit?” called the fox, “I want to be your friend.”

The rabbit knew that this was one of the fox’s tricks so he called, “I’m over here next to the bee hive.”

The hungry fox raced to the bee hive but there was no rabbit....only a big swarm of bees.

The fox sped off as fast as he could, with the bees buzzing right behind him.



Questions.

1. Who hid behind a tree? _____

2. Who was hungry? _____

3. Was the rabbit next to the beehive? _____

4. What was at the beehive? _____


5. What did the fox do when it got to the bee hive?

6. What did the bees do? _____

Andy, the Ant with Five Legs

Once there was an ant
named Andy.
Andy had five legs...
one-two-three-four-five.

All the other ants had six
legs...
one-two-three-four-five-six.



One day Blacky Ant said to Andy, "Why do you have only five legs?"

Andy said, "Well, I was sitting on a rock when a boy trod on one of my legs and it came off."

"Oh," said Blacky, "did it hurt?"

Andy said, "It only hurt a little bit and the boy said sorry."

Questions (answer in whole sentences)


1. How many legs do ants have?

2. Which ant had five legs?

3. Which ant spoke to Andy?

4. Was Andy sitting on a log or on a rock?

Olly the Octopus and Freda the Fish



Olly was always happy but Freda was always sad.


One day Olly said to Freda, "Why do you look so sad?"

Freda said, "I'm sad because you have lots of arms and I don't."

"Oh," said Olly, "don't be sad, just be happy with what you do have...nice fins and a tail to help you swim well."

Freda swam away and came back the next day.

"Olly," said Freda, "you are right. A big fish was chasing after me and I swam away very fast. I am lucky to have my fins and tail."



Questions (answer in sentences)

1. Why was Freda sad?

2. What can Freda do well with her fins and tail?

3. What chased after Freda?
