

HOLIDAY



Homework

Name: _____

Primary 1

Dear Parents,

Summer break is here!!! It has been such a joy to watch your children grow and learn so much. We are very proud of all the progress each child has made. Your support and efforts at home have been a major reason for your child's successes every time. Each of you is to be commended for your efforts.

In order to make sure that your child keeps the "brain juices" flowing over the summer break, we have put together a packet that reviews great materials we have learned till now and an introduction of what we will learn in future. Completing the assigned pages each week would be very beneficial as it would help ensure retention of the materials learned. Moreover, completion of this packet will get us off on the right foot when your child returns to school.

Once again, thank you for all your support! We look forward to seeing all of your children's bright and shining faces soon. Enjoy the summer!

Regards,

Management

Be Creative, Be Kind, Be Happy, Be Safe & Be You!

Computer Assignment:

Using MS Word, write a poem on Summer Vacations (use different font sizes, font colors and style). Take a print and attach it in your file.

Activity Title: Parts of Computers

1. Visit the website www.typing.com
2. Complete 4 levels in sequential order and take the test
3. You need to create an account to login the website www.typing.com (take help from parents).
4. When you login, Choose the option "Test" and pass tests mentioned below consisting of 1, 3 and 5 minutes.
5. Ensure to clear the exams yourself. You could do practice using same website www.typing.com before giving the test
6. Earn your certificate after completing test.
7. Every certificate includes a unique verification link, which you need to share with your parents , so they could verify your scores.

Islamiyat Assignment:

1. Write a biography of Prophet Hud (AS)
2. Memorize full Surah Yaseen
3. Daily Recitation

100 Times Recitation	
Monday	Alhamdulillah
Tuesday	Subhan Allah
Wednesday	Allah o Akbar
Thursday	Astagfirullah
Friday	Durood-e- Shareef
Saturday	First Kalimah
Sunday	سُبْحَانَ اللَّهِ وَبِحَمْدِهِ سُبْحَانَ اللَّهِ الْعَظِيمِ

4. Allah's Names
5. Prophet's ﷺ Names
6. Recitation of Ayat-ul-Kursi for protection
7. Dua for Increasing Eman
8. Dua for Increasing Knowledge
9. Dua for earning unlimited reward
10. Morning and Evening Tasbih

11. Miswak Application
12. 100 Times Recitation as per the day
13. Surah Yaseen (Memorization)
14. Fajar Pray
15. Zuhr Pray
16. Asar Pray
17. Magrib Pray
18. Esha Pray
19. 80 Times Friday's Durood Sharif
20. Charity as per the feasibility

Mathematics Assignment:

Mathematics Assignments

1- Find the missing numbers.

a. $2 + \underline{\quad} = 7$	b. $1 + \underline{\quad} = 8$	c. $4 + \underline{\quad} = 6$	d. $\underline{\quad} + 3 = 8$
$3 + \underline{\quad} = 8$	$2 + \underline{\quad} = 10$	$\underline{\quad} + 3 = 9$	$\underline{\quad} + 6 = 10$

2- Fill in the missing parts.

a. $20 + 7 = \underline{\quad}$	b. $6 + \underline{\quad} = 56$	c. $40 + \underline{\quad} = 40$
$5 + 60 = \underline{\quad}$	$30 + \underline{\quad} = 39$	$4 + \underline{\quad} = 94$

Put the numbers in order.

a. 16, 61, 26

_____ < _____ < _____

b. 54, 14, 51

_____ < _____ < _____

3- Add and subtract

a.
$$\begin{array}{r} 14 \\ + 35 \\ \hline \end{array}$$

b.
$$\begin{array}{r} 59 \\ - 34 \\ \hline \end{array}$$

c.
$$\begin{array}{r} 40 \\ + 56 \\ \hline \end{array}$$

d.
$$\begin{array}{r} 96 \\ - 60 \\ \hline \end{array}$$

4- Write a subtraction sentence that matches with the addition $6 + 8 = 14$.

_____ - _____ = _____

5- How many more is 70 than 50? _____ more

6- Henry owns four more cars than Mark, and Mark owns six cars.
Draw Mark's cars and Henry's cars.

7- Ten kids are playing in the yard. There are 6 boys. How many girls are there?

8- Andy had 20 dollars. He bought a book for 10 dollars and another for 5 dollars.
How much money does he have left?

Math About ME

I am _____ years old

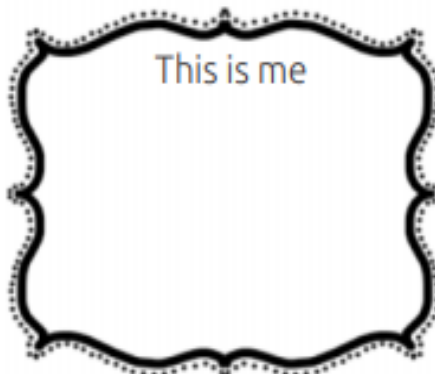
My birthday is on: ___/___/___

My First Name

My Last Name

I have _____ letters in my first name.


I have _____ letters in my last name.



My favourite number is _____. There are _____ people in my house. I have lost _____ teeth so far. I have _____ pets at home.

Missing Parts

Direction: Look at each puzzle. Draw the missing puzzle pieces.



Q1. Seven red apples and two green apples are in the basket. How many apples are in the basket?



Q2. Ali had five toy cars, then he added seven more. What is the total number of cars?



Q3. There were six owls sitting on the branch. Eleven more owls joined them. How many owls are there altogether?



Q4. How many fingers are there in two hands?



Q5. Asad has twenty-two ducks in the pond. Three more came in the pond. How many ducks in all?



Q6. Sara has seven dolls and Hira has two dolls. How many dolls altogether?



Q7. There are fourteen sheep in the barn. Three more sheep join them. How many sheep are there in the barn?



Q8. I have thirty-one cooking books and twenty-three reading books.
How many books are altogether?



Q9. I had fifteen pencils. I gave 5 away.
How many are left?



Q10. Eight turtles were in the pond.
Five got out in the sun. How many turtles were left in the pond?



SCIENCE ASSIGNMENT

Discover secrets of the five senses and why they are vital to help us understand our world from the given link and write a paragraph on senses.

<https://www.theschoolrun.com/homework-help/our-senses>

Project Work

1. Design a cover for a book about Food.
2. Write a content page for your food book.
3. Paste any 10 pictures of your favorite food and label them.

4. Healthy eating is good eating. Food makes us strong and healthy. We must eat different kinds of food.

1. Make a food diary for one week on the given format. Record your daily intake of food.

Food diary

Breakfast		
Lunch		
Dinner		
Other food		
Total number of food items	Healthy	Unhealthy

- After recording for 1 week, underline unhealthy food items with red colour and healthy food items with blue.
- Count total number of unhealthy and healthy food items at the end of each day.
- At the end of a week see total number of unhealthy and healthy food items.
- If your food intake contains more healthy food items then it is a good thing. Write your opinion in three lines on the benefits of eating healthy food.
- If your food intake contains more unhealthy food items then it is a bad thing. Write your opinion in three lines on the hazards of eating unhealthy food.
- Should we eat same type of healthy food or should we eat variety
- of healthy food. Give one reason if you choose we should eat variety of healthy foods

Instructions

- As part of your course, you are required to submit the review articles.
- This exercise is meant to inculcate research temperament and skills by carrying out the in-depth study of given research topics relevant to the course, and to make you familiarize with different online available data resources.
- Make the assignments on the following topics.

Warning: Write in your own words, do not copy-paste. Plagiarism is not acceptable. Compile your research assignment with the help of parents or any adult, on the given topics.

How old is the universe?

How important is it to explore our solar system? Is space exploration really necessary?

What is dark energy?

Was there ever life on Mars?

Is it realistic that people can live on another planet?

SOCIAL STUDIES ASSIGNMENT

Paste the pictures of your family members and make a family tree on a card sheet A4 size.

URDU ASSIGNMENT

- ☆ - کتاب موتیا: صفحہ نمبر ۴۱ کی مدد سے ہندسوں اور لفظوں میں گنتی لکھیے اور مشق بھی کیجیے۔
- ☆ - کتاب موتیا: صفحہ نمبر ۴۰ کی مدد سے کچھوے اور گھوڑے کے بارے میں پانچ پانچ جملے لکھیے۔
- ☆ - کتاب پھول: صفحہ نمبر ۵۴ ”کینو“ کی کہانی کی مدد سے ”سیب“ کی کہانی لکھیے۔
- ☆ - کتاب پھول: صفحہ نمبر ۶۴، نظم: ”غبارے“ کی مدد سے رنگوں کے نام لکھیے اور تصاویر بنا کر رنگ بھی بھریئے۔
- ☆ - کتاب پھول: صفحہ نمبر ۷۵، نظم: ”پھل“ پڑھیے اور اس نظم کو ایک پیراگراف کی شکل میں مختصراً لکھیے۔
- ☆ - کتاب موتیا: صفحہ نمبر ۸۶، نظم ”پھلوں کا ٹھیلا“ کی مدد سے پھلوں کے نام تلاش کر کے کاپی میں لکھیے اور تصاویر بنا کر رنگ بھی بھریئے۔
- ☆ - عنوان ”میرا پاکستان“ پر پانچ جملے بنائیے اور پاکستان کا جھنڈا بنا کر رنگ بھریئے۔
- ☆ - میٹھی عید کے بارے میں پانچ جملے لکھیے اور عید کا رڈ بھی بنائیے۔
- ☆ - (تفہیم) کتاب موتیا: صفحہ نمبر ۸۳ (کیا لاؤں) کو پڑھ کر صفحہ نمبر ۸۴ پر دیئے گئے سوالات کے جوابات لکھیے۔
- ☆ - مندرجہ ذیل صفحات کو ”کتاب موتیا“ میں کیجیے۔
(موتیا صفحہ نمبر: ۶۸، ۶۹، ۷۵، ۸۰، ۸۱، ۸۲، ۸۵ اور ۸۷ کتاب میں کیجیے)۔

عنوانات برائے تخلیقی لکھائی:

پہلی جماعت:

- ۱۔ میرا تعارف ، ۲۔ میرا بہترین دوست ، ۳۔ باغ کی سیر ، ۴۔ میرا پسندیدہ کھلونا
- ۵۔ صفائی کے ۱۰ بنیادی اصول

ENGLISH ASSIGNMENT

1. Read any story and Imagine you are part of this story. Make your own short story;
 - a. What happened next?
 - b. What fun did you have?
 - c. What problem did you face?
2. Select any 5 action words and use them in your sentences
3. Use any 5 describing words in your sentences.
4. Observe the pictures and write five sentences about it.



5. Describe your house in ten sentences.
6. Write a story about a girl who went to visit her grandparents.
 - a. Why did she visit them?
 - b. What did she do there?
 - c. Add more information to create a funny story.
7. Imagine you went to the Moon. Write what you did there. Who did you meet there?
8. Write ten sentences on each topic
 - a. My favorite food
 - b. My favorite pet
 - c. My favorite season
 - d. My mom's/dad's hobby
 - e. My new friend
 - f. My shopping list
9. Read and solve the given comprehensions.

Shelly the Snail

Shelly is a little snail.



She is called Shelly because her home is a shell.

Shelly slides very slowly along the ground.

One day she slid a long way...about 100 metres.

She got so tired that she had to have a long sleep.

Shelly slept for 10 hours. She dreamt she wasn't little any more.

She was huge!



Questions.

1. Shelley's home is a _____.
2. She slides along the _____.
3. When Shelley got tired she had a _____ sleep.
4. For how many hours did Shelley sleep? _____
5. Shelley _____ she wasn't little any more.
6. Write a sentence to say how Shelley looks in her dream.

Anna's New Bike

Anna has a new bike.
It is a shiny blue colour.

Anna's brother Tim also has
a bike.
Tim's bike is silver.



Anna's bike



Tim's bike



When Anna and Tim ride their bikes they
always wear helmets.
That's because they know about road safety.

Questions.

1. What colour is Anna's new bike? _____

2. What is the name of Anna's brother? _____

3. What colour is Tim's bike? _____

4. Anna and Tim always wear a _____ when
they ride their bikes.

5. Anna and Tim know about _____ safety.

6. How is Anna's bike different from Tim's bike?

The Three Fish

These fish have names.

This is Finny.

Finny has beautiful long fins that help her swim fast.



This is Tayla.

Tayla's big tail moves from side to side and it helps her to go this way or that way.



This is Igor.

Igor has great big eyes. Igor's great big eyes help him to see where he is going and they also help him to see big scary fish!



Questions.


1. Which fish has long fins? _____
2. Which fish has great big eyes? _____
3. Which fish has a big tail? _____
4. Which of these fish would you most like to have as a pet?

Ben and Sally

Ben is a little boy. He is 5 years old.

Ben likes to play with his truck and toy cars. The cars can go very fast.

When Ben plays with his cars he makes a sound like this...
"Vroom, vroom, vroom."



Ben has a sister. Her name is Sally and she is 4 years old.

Sally has a doll. The name of Sally's doll is Tammy.

Sally likes to dress Tammy in pretty clothes.

Questions (put a ring around the best answers)

1. How old is Ben? Ben is 4 5 6
2. Ben likes to play with his truck and blocks dolls cars
3. How old is Sally? Sally is 4 5 6
4. What does Sally like to play with? her car her doll her dog
5. What is the name of Sally's doll? It is Tammy Emma Anna
6. Who dresses Tammy? Mother does Sally does Ben does

What does Ben do when he plays with his cars?
